

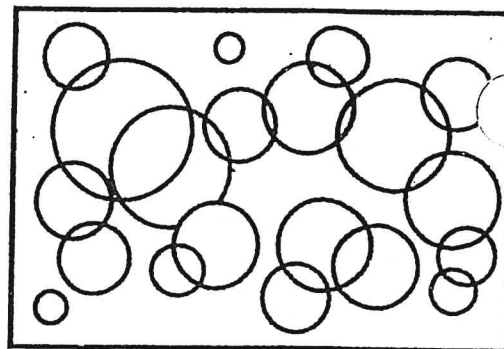
Nom:

Date:

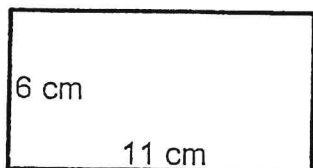
Professeur:

Groupe:

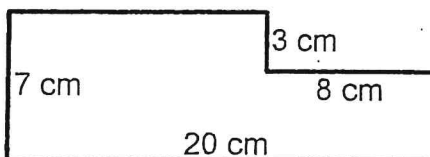
Calcule le périmètre et l'aire.



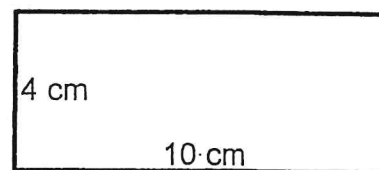
1.  $P =$  \_\_\_\_\_  $A =$  \_\_\_\_\_



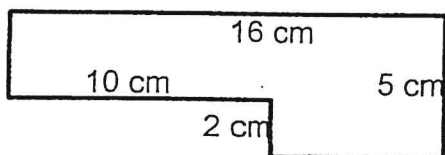
6.  $P =$  \_\_\_\_\_  $A =$  \_\_\_\_\_



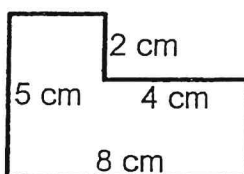
11.  $P =$  \_\_\_\_\_  $A =$  \_\_\_\_\_



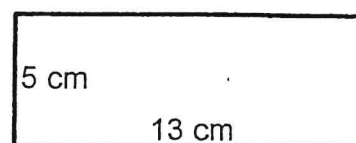
2.  $P =$  \_\_\_\_\_  $A =$  \_\_\_\_\_



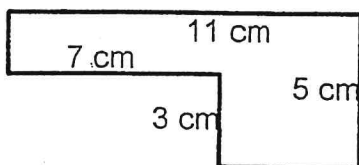
7.  $P =$  \_\_\_\_\_  $A =$  \_\_\_\_\_



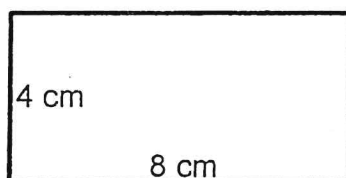
12.  $P =$  \_\_\_\_\_  $A =$  \_\_\_\_\_



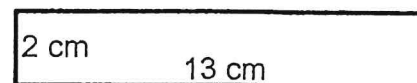
3.  $P =$  \_\_\_\_\_  $A =$  \_\_\_\_\_



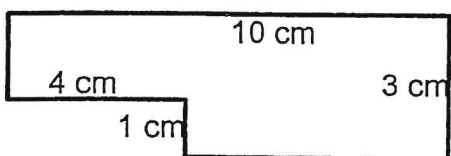
8.  $P =$  \_\_\_\_\_  $A =$  \_\_\_\_\_



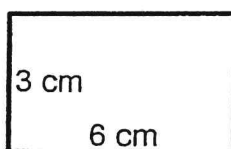
13.  $P =$  \_\_\_\_\_  $A =$  \_\_\_\_\_



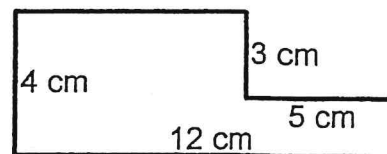
4.  $P =$  \_\_\_\_\_  $A =$  \_\_\_\_\_



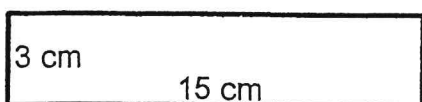
9.  $P =$  \_\_\_\_\_  $A =$  \_\_\_\_\_



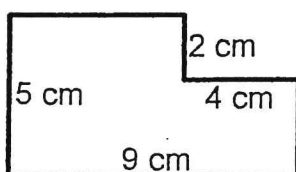
14.  $P =$  \_\_\_\_\_  $A =$  \_\_\_\_\_



5.  $P =$  \_\_\_\_\_  $A =$  \_\_\_\_\_



10.  $P =$  \_\_\_\_\_  $A =$  \_\_\_\_\_



15.  $P =$  \_\_\_\_\_  $A =$  \_\_\_\_\_

